

SST History**Multiple Choice Questions (1 Marks)****2 x 1=2**

- 1) Where was Martial Law imposed by General Dyer ? **1.0**
- A) Lucknow
B) Lahore
C) Amritsar
D) Dandi
- 2) What role did chapbooks play in the spread of print culture? **1.0**
- A) They disseminated religious texts
B) They provided cheap literature to the masses
C) They were used for political propaganda
D) They facilitated scholarly communication

Picture based MCQS (1 Marks)**3 x 1=3**

- 3) Which of the following best describes this image of factory of 1830 AD? **1.0**



- A) A rail coach factory
B) A mineral based industry
C) A spinning factory
D) A handloom factory
- 4) Which of the following option best signifies the given image? **1.0**



- A) White house, U.S.A
B) Mount Washington Hotel, Bretton woods
C) Headquarters of IMF
D) Headquarters of World Bank

5) Which of the following aspect signifies this image?

1.0



- A) The proclamation of the German empire
- B) Coronation of Louis Philippe at hall of Versailles
- C) The Frankfurt Parliament in the church of St. Paul
- D) None of the above

Short Answer Question (2 Marks)

1 x 2=2

6) Which was the earliest active coastal trade link ?

2.0

Short Answer Question (3 Marks)

1 x 3=3

7) Why did Mahatma Gandhiji decide to launch a nationwide Satyagraha against the proposed Rowlatt Act? Explain any three reasons.

3.0

Long Answer Question (5 Marks)

1 x 5=5

8) What changes did Napoleon introduce to make the administrative system more efficient in the territories ruled by him?

5.0

---OR---

What happened during the year following 1815 when the fear of repression drove many liberal - nationalists underground ? Explain.

Solve Question 9 to Question 11 based on the following paragraph:

Study the picture and answer the questions that follows:



9) Identify the above figure.

1.0

10) Name the artist who painted the image.

1.0

11) What is the significance of the image?

1.0

Multiple Choice Questions (1 Marks)

2 x 1=2

- 1) What does gender division mean? **1.0**
- A) Unequal child-sex ratio
 - B) Absence of voting rights for women
 - C) Biological difference between men and women
 - D) Unequal roles assigned by the society to men and women
- 2) Besides Hindi, how many scheduled languages are recognised by the Constitution? **1.0**
- A) 19
 - B) 22
 - C) 18
 - D) 21

Picture based MCQs (1 Marks)

3 x 1=3

- 3) Which of the following best signifies this image of 'puppet theatre'?

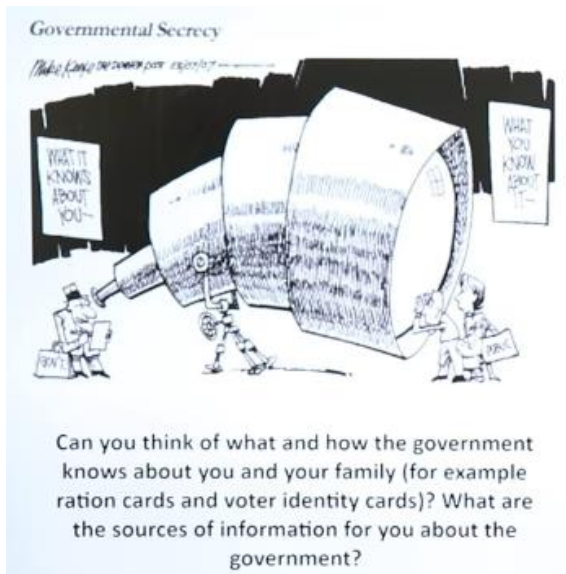
1.0



- A) Prime Minister of Japan
- B) Prime Minister of Britain
- C) Prime Minister of Italy
- D) Prime Minister of America

4) What does the cartoon signify?


1.0



- A) Governmental secrecy
- B) Additional need of funds for running government
- C) More powers and anatomy of the government
- D) Proportional representation in the union government

5) Which of the following option best signifies this cartoon?

1.0



- A) Unitary form of government
- B) Monarchy
- C) Dictatorship
- D) Coalition form of government

Short Answer Question (2 Marks)**1 x 2=2**

- 6) Name a few leaders who worked for ending casteism in India.

2.0**---OR---**

What do you mean by the term 'Secular'.

Short Answer Question (3 Marks)**2 x 3=6**

- 7) "Serious efforts were made by the legal organizations to reform political parties in India." Support the statement. **3.0**
- 8) "Democracies lead to peaceful and harmonious life among citizens." Support the statement with any three suitable arguments. **3.0**

Long Answer Question (5 Marks)**1 x 5=5**

- 9) Describe the measures taken to decentralise power in India.

5.0**---OR---**

Comment on the largest experiment in Indian democracy.

Multiple Choice Questions (1 Marks)**5 x 1=5**

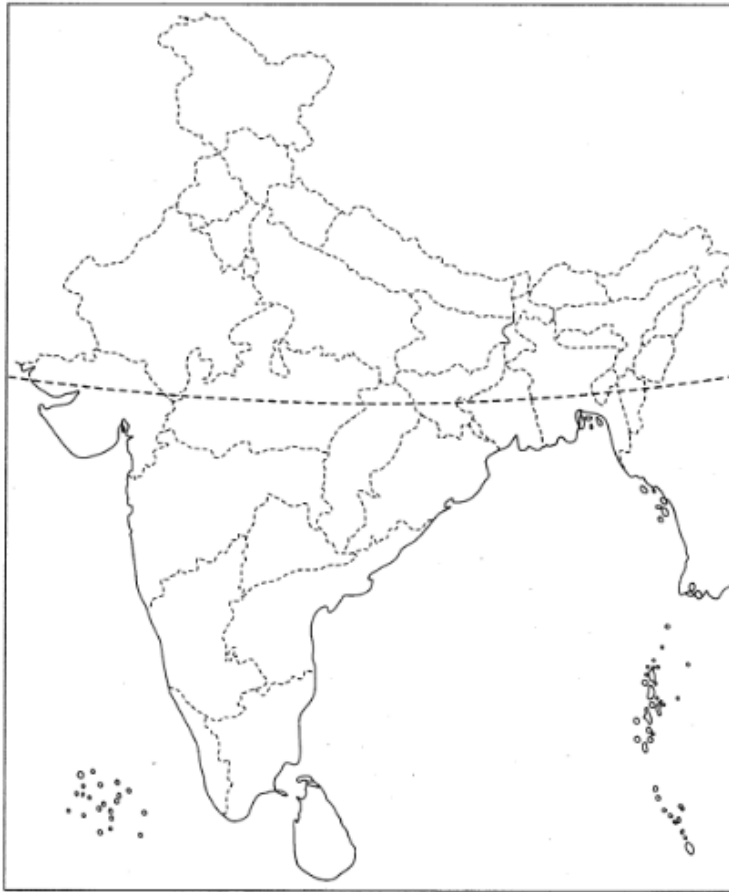
- 1) Which of these States is not connected with the H.V.J. pipeline? **1.0**
- A) Maharashtra
 - B) Gujarat
 - C) Madhya Pradesh
 - D) Uttar Pradesh
- 2) Which of the following is not of concern to geographers? **1.0**
- A) Distribution of minerals
 - B) Formation, age and physical and chemical composition of minerals
 - C) Economic activities associated with minerals
 - D) Minerals as part of the Earth's crust for better understanding of landforms
- 3) Which ministry is responsible for the administration of civil aviation in India? **1.0**
- A) Ministry of Railways
 - B) Ministry of Civil Aviation
 - C) Ministry of Road Transport and Highways
 - D) Ministry of Shipping
- 4) Endemic species refers to **1.0**
- A) Species which are extinct.
 - B) Species which are declining.
 - C) Species which are confined to specific areas only.
 - D) Species which are normal
- 5) Which mineral is used to make stainless steel? **1.0**
- A) Nickel
 - B) Copper
 - C) Gold
 - D) Zinc

Short Answer Question (2 Marks)

2 x 1=2

- 6) Locate and label the following items on the given map with appropriate symbols.
1. Regions covered under Alluvial soil
 2. Regions covered under Laterite Soil
 3. Regions covered under Black soil.

1.0



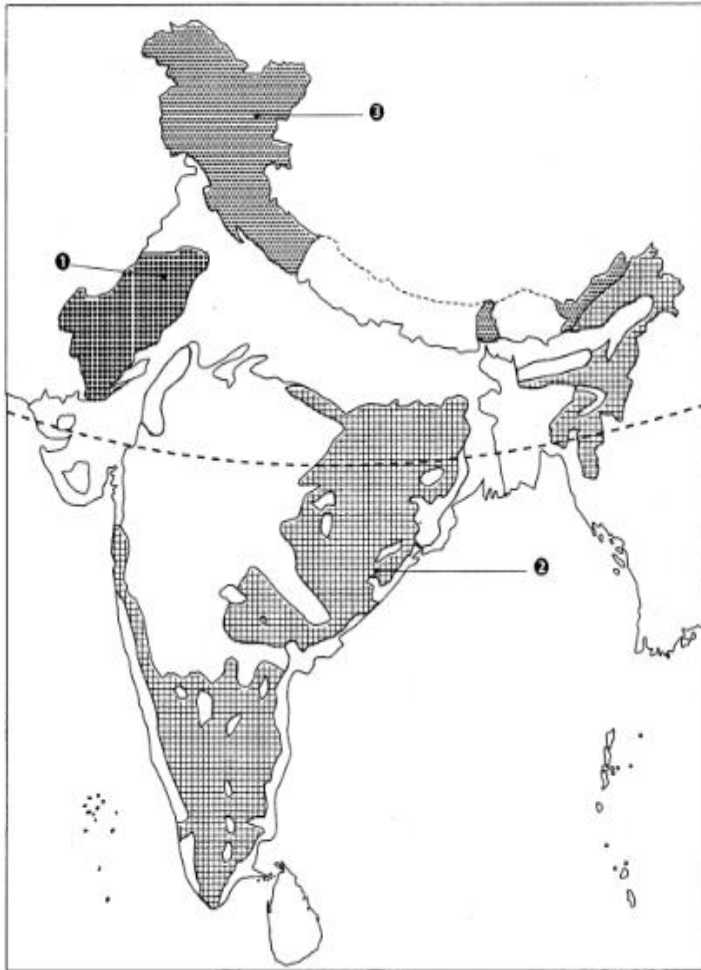
- 7) Features are marked by numbers in the given outline map of India. Identify these features with the help of the following information and write their correct names on the lines marked in the map.
1. A major soil type
 2. Soil type that is formed where the rainfall is low

1.0

OR

On the above information. Identify the feature with the help of the following information and write their correct name on the lines marked in the map.

Soil type found mainly in hill slopes



Short Answer Question (2 Marks)

1 x 2=2

- 8) How is land used in India?

2.0

Short Answer Question (3 Marks)

1 x 3=3

- 9) How are means of transport and communication complementary to each other? Explain with three examples.

3.0

Long Answer Question (5 Marks)

1 x 5=5

- 10) Write a note on good practices towards conserving forest and wildlife.

5.0

---OR---

Explain the role of forests in maintaining the ecological balance of the environment.

Solve Question 11 to Question 14 based on the following paragraph:

Read the given extract and answer the following questions:

Classification of Resources:

(a) On the Basis of Origin - Biotic and Abiotic

Biotic Resources are obtained from the biosphere and have life. Eg: Human beings, flora and fauna, fisheries, livestock etc.

Abiotic Resources: All those things which are composed of non-living things are called abiotic resources.

Eg: rocks and metals.

(b) On the Basis of Ownership - Individual, Community, National and International Individual Resources are owned privately by individuals. In villages, people own lands whereas in urban areas people own plots, houses and other properties. Eg: Plantation, pasture lands, ponds, water in wells etc. Community Owned Resources are accessible to all the members of the community. Eg: Grazing grounds, burial grounds, public parks, picnic spots, playgrounds etc. National Resources are owned by a nation or country. All the minerals, water resources, forests, wildlife, land within the political boundaries and oceanic area up to 12 nautical miles (22.2 km) from the coast termed as territorial water and resources therein belong to the nation. Eg: Roads, canals, railways etc.

International Resources are regulated by international institutions. The oceanic resources beyond 200 nautical miles of the Exclusive Economic Zone belong to open ocean and no individual country can utilise these without the concurrence of international institutions.

Answer the following MCQs by choosing the most appropriate option:

- 11) National Resources are owned by our country. Similarly, the International resources are owned by _____. **1.0**
- A) International Organisation
 - B) World Organisation
 - C) World Trade Organisation
 - D) All of these
- 12) An oil reserve has been discovered in an ocean. The oil reserve is 20 kms from the coast of India. Classify the oil reserve. **1.0**
- A) Abiotic Resource
 - B) National Resource
 - C) Community Owned Resource
 - D) International Resource
- 13) _____ are all the physical; and biological elements used for human welfare all over the world. **1.0**
- A) Abiotic Resources
 - B) Individual Resources
 - C) Community Owned Resources
 - D) International Resources

14) Match the types of ownership in Column I with example in Column II:

1.0

Column I	Column II
A. Individual Resources	1. Antarctica continent
B. National Resources	2. Hotel Taj Palace of Tata
C. International Resources	3. Indian Defence Army

- A) A-1, B-2, C-3
B) A-3, B-2, C-1
C) A-2, B-3, C-1
D) A-1, B-3, C-2

Techior Solutions Pvt. Ltd.

Multiple Choice Questions (1 Marks)**5 x 1=5**

- 1) Development involves thinking about these questions and about the ways in which we can work towards achieving these goals. What kind of a task it is? **1.0**
- A) Easy
 - B) Complex
 - C) Normal
 - D) Very difficult
- 2) Which of the following activities is a part of the secondary sector? **1.0**
- A) Transport
 - B) Banking
 - C) Construction
 - D) Fishing
- 3) Currency in India is issued by? **1.0**
- A) Reserve Bank of India
 - B) State Bank of India
 - C) Union Bank of India
 - D) Punjab National Bank
- 4) Today, Consumers International has become an umbrella body of how many organisations? **1.0**
- A) 240
 - B) 250
 - C) 220
 - D) 230
- 5) What happens if the borrower fails to repay the loan? **1.0**
- A) If the borrower fails to repay the loan, the lender has no right to sell the asset or collateral
 - B) If the borrower fails to repay the loan, the lender has the right to sell the asset or collateral to obtain payment
 - C) If the borrower fails to repay the loan, the lender has the right to sell the asset or collateral partially to obtain payment
 - D) If the borrower fails to repay the loan, the lender waits till the borrowers make the full payment

Short Answer Question (2 Marks)**1 x 2=2**

- 6) List various ways through which digital transactions are made. **2.0**

Short Answer Question (3 Marks)**1 x 3=3**

- 7) How can the government help to have fair globalisation in an economy? **3.0**

---OR---

How have our markets been transformed ? Explain with examples.

Long Answer Question (5 Marks)**1 x 5=5**

- 8) What are Demand Deposits ? Explain any three features of it ?

5.0

OR

Which type of deposits with the banks are called demand deposits ? State some important features of demand deposits.

---OR---

Why is money transaction system better than Barter system ? Explain with examples.

Solve Question 9 to Question 12 based on the following paragraph:**Read the given extract and answer the following questions:**

Besides seeking more income, one way or the other, people also seek things like equal treatment, freedom, security, and respect of others. They resent discrimination. All of these are important goals. In fact, in some cases, these may be more important than more income or more consumption because material goods are not all that you need to live. Money, or material things that one can buy with it, is one factor on which our life depends. But the quality of our life also depends on non-material things. Consider an example: If you get a job in a far-off place, before accepting it you would try to consider many factors, apart from income, such as facilities for your family, working atmosphere, or opportunity to learn. In another case, a job may give you less pay but may offer regular employment that enhances your sense of security. Another job, however, may offer high pay but no job security and also leave no time for your family. This will reduce your sense of security and freedom. Similarly, for development, people look at a mix of goals. It is true that if women are engaged in paid work, their dignity in the household and society increases. However, it is also the case that if there is respect for women there would be more sharing of housework and a greater acceptance of women working outside. A safe and secure environment may allow more women to take up a variety of jobs or run a business. Hence, the developmental goals that people have are not only about better income but also about other important things in life.

Answer the following MCQs by choosing the most appropriate option :

- 9) "Women, who are engaged in paid jobs are an example of persons who fulfil a mix of goals." **1.0**
Which of the following statement is incorrect with the given statement?
- A) A secure environment may allow more women to take up a variety of jobs or run a business
 - B) If there is respect for women, there would be greater acceptance of women working outside
 - C) If women are engaged in paid work, their dignity in the household and society decreases
 - D) All are correct
- 10) The approach of living a life in bungalows, with costly cars, bikes and international tours is **1.0**
_____ life.
- A) Materialistic
 - B) Social
 - C) Boasted
 - D) Both a and c
- 11) "Besides seeking more income, people also seek things like equal treatment, freedom, security and respect of others". What does the given statement signify? **1.0**
- A) Mixed goals are important for people for development
 - B) Common goals are important for people for development
 - C) Conflicting goals are important for people for development
 - D) Similar goals are important for people for development

- 12)** Gaurav currently residing in Surat applied for a job in an educational learning hub "My cbse guide" located in Delhi. He got selected in an interview. The company offered him a handsome salary. However, Gaurav is confused. Apart from salary, what other goals he should keep in mind while taking up a new job? **1.0**
- A)** Opportunity to learn
 - B)** Working atmosphere
 - C)** Job security
 - D)** All of the above

Techior Solutions Pvt. Ltd.